



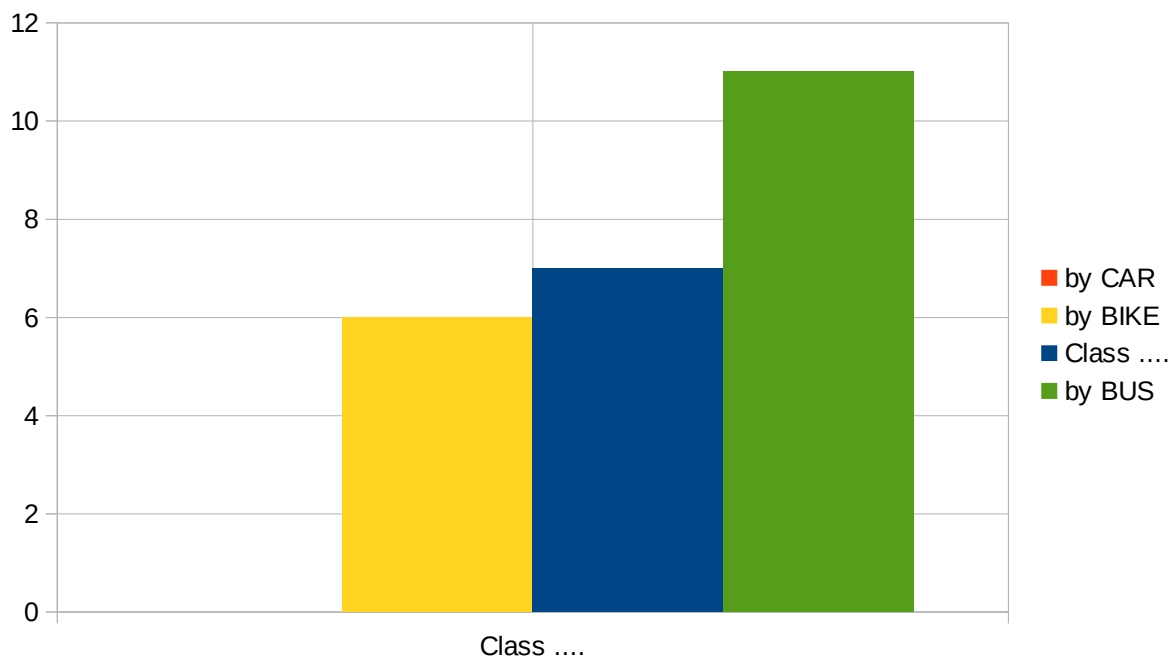


Transport survey:

CLASS: \_\_\_\_\_

# How do you go to school?

	TOTAL:
By BIKE 	0
By BUS 	6
By CAR 	7
On FOOT 	11
Total number of children:	24



## Conclusions:

**Most** children go to school ON FOOT.





How many children go to school BY BIKE? \_\_\_\_\_  
How many children go to school BY BUS? \_\_\_\_\_  
How many children go to school BY CAR? \_\_\_\_\_  
How many children go to school ON FOOT? \_\_\_\_\_



How many children go to school BY BIKE? \_\_\_\_\_  
How many children go to school BY BUS? \_\_\_\_\_  
How many children go to school BY CAR? \_\_\_\_\_  
How many children go to school ON FOOT? \_\_\_\_\_



How many children go to school BY BIKE? \_\_\_\_\_  
How many children go to school BY BUS? \_\_\_\_\_  
How many children go to school BY CAR? \_\_\_\_\_  
How many children go to school ON FOOT? \_\_\_\_\_



How many children go to school BY BIKE? \_\_\_\_\_  
How many children go to school BY BUS? \_\_\_\_\_  
How many children go to school BY CAR? \_\_\_\_\_  
How many children go to school ON FOOT? \_\_\_\_\_



How many children go to school BY BIKE? \_\_\_\_\_  
How many children go to school BY BUS? \_\_\_\_\_  
How many children go to school BY CAR? \_\_\_\_\_  
How many children go to school ON FOOT? \_\_\_\_\_



How many children go to school BY BIKE? \_\_\_\_\_  
How many children go to school BY BUS? \_\_\_\_\_  
How many children go to school BY CAR? \_\_\_\_\_  
How many children go to school ON FOOT? \_\_\_\_\_